

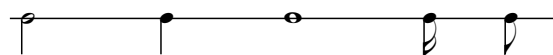
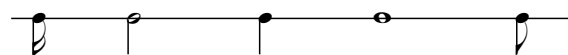
Worksheet 1/4

Name: _____

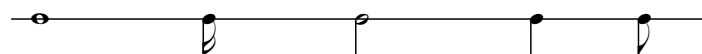
♩ = sixteenth note	♪ = quarter note	♩ = whole note
♪ = eighth note	♩ = half note	

Name the following note values:

1.



3.



Name or define the following symbols:

♩ : treble clef

rit. : gradually slow down

< : gradually get louder

> : gradually get softer

(extra lines above or below staff) : ledger lines



(extra lines above or below staff) :



> :

rit. :

♩ = eighth rest	— (above line) = half rest
♩ = quarter rest	— (below line) = whole rest

Name the following rest values:



2.




Performance Portion:

Be able to play a selection of your teachers choice from your repertoire.

Quiz 1/4

Name: _____

1. Identify the following note/rest names (eighth, quarter, etc):



2. Name this symbol:



3. What do these symbols tell you to do?:



:

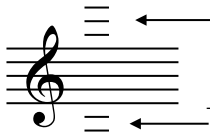


:

rit.

:

4. What are the "extra" lines above or below the staff called?:



Performance Portion:

1. Play mm ____ to ____ from " _____ "