

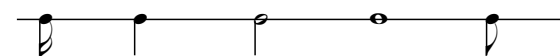
Worksheet 1/5

Name: _____

♩ = sixteenth note ♪ = quarter note ○ = whole note
 ♫ = eighth note ♮ = half note

Name the following note values:

1. 

2. 

3. 

Left Hand Finger Numbers:
 index = 1 ring = 3
 middle = 2 pinky = 4

Right Hand Finger Letters:
 thumb = p middle = m
 index = i ring = a

Write the Left hand finger numbers for the given finger:

1. ring: pinky: index: middle:
2. pinky: middle: ring: index:
3. index: ring: middle: pinky:

Write the Right hand finger letter for the given finger

1. thumb: index: middle: ring:
2. index: ring: thumb: middle:
3. ring: middle: ring: index:

Identify the following notes by letter name:

1. 

2. 

7 = eighth rest - (above line) = half rest
 ‡ = quarter rest - (below line) = whole rest

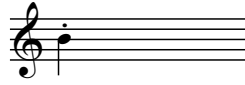
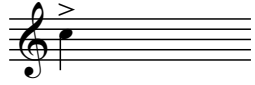
Name the following rest values:

1. 

2. 

. = play short
> = play loud

What do the following symbols above the note indicate:



Performance Portion:

For the quiz, be prepared to sit in perfect playing position.


Be prepared to play a short sight reading example using open strings with p on 4, i on 3, and m on 2.

Be prepared to play a short example from your repertoire.

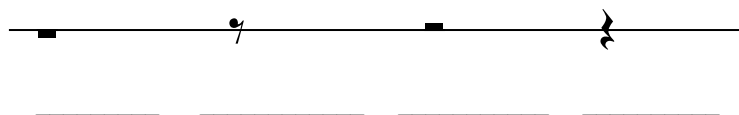
Quiz 1/5

Name _____

1. Name the following notes (sixteenth, eighth, quarter, half, whole):



2. Name the following rests:



3. Write the appropriate **left** hand number for the given finger:

index

ring

pinky

middle

4. Write the appropriate **right** hand number for the given finger:


thumb

middle

index

ring

5. Identify the following notes by letter name:



6. Describe what the following symbols above the note indicate:

