

Worksheet 4/3

Name: _____

Identify the left hand finger numbers in this C Major Scale:

Example



Identify these MAJOR Key Signatures:

Example



C MAJOR


G MAJOR

D MAJOR



Identify these notes on Strings 4, 5, and 6:

Example



E

F#

G

A

B

C

D

E

F#



Identify these PIMA "block" chords:

Example



G Maj.

a min.

C Maj.

D Maj.



Performance Portion:

Be able to play a 1-Octave C Major Scale alternating throughout with good tone and legato style.
Be able to perform a section of your repertoire selected by your teacher.

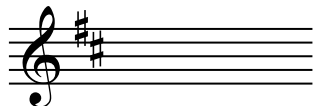
Quiz 4/3

Name _____

1. Identify the left hand finger numbers in this C Major Scale



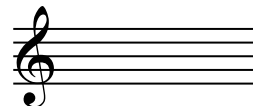
2. Identify these Key Signatures



_____ Major



_____ Major




_____ Major

3. Identify these notes on Strings 4, 5, and 6



4. Identify these PIMA "block" Chords



Performance Portion:

1. Play a One-Octave C Major Scale alternating throughout with good tone and legato style

2. Play mm _____ to _____ from " _____ "